




Butterfly- Themed



Math Worksheets: Kindergarten-1st

Includes:

Addition, Subtraction, Adding
Doubles, Skip counting by 5's and
10s, and story problems.



Created by Bethany @
MathGeekMama.com



Add or Subtract:

1. $\begin{array}{r} 3 \\ + 6 \\ \hline \end{array}$

2. $\begin{array}{r} 10 \\ + 5 \\ \hline \end{array}$

3. $\begin{array}{r} 4 \\ - 1 \\ \hline \end{array}$

4. $\begin{array}{r} 8 \\ - 2 \\ \hline \end{array}$

5. $\begin{array}{r} 6 \\ + 4 \\ \hline \end{array}$

6. $\begin{array}{r} 9 \\ - 8 \\ \hline \end{array}$

7. $\begin{array}{r} 10 \\ - 1 \\ \hline \end{array}$


8. $\begin{array}{r} 2 \\ + 3 \\ \hline \end{array}$

9. $\begin{array}{r} 5 \\ + 5 \\ \hline \end{array}$

10. $\begin{array}{r} 4 \\ + 3 \\ \hline \end{array}$

11. $\begin{array}{r} 9 \\ - 6 \\ \hline \end{array}$

12. $\begin{array}{r} 3 \\ + 9 \\ \hline \end{array}$



Adding Doubles

$$\begin{array}{r} 1. \quad 3 \\ + 3 \\ \hline \end{array}$$

$$\begin{array}{r} 2. \quad 10 \\ + 10 \\ \hline \end{array}$$

$$\begin{array}{r} 3. \quad 4 \\ + 4 \\ \hline \end{array}$$

$$\begin{array}{r} 4. \quad 8 \\ + 8 \\ \hline \end{array}$$

$$\begin{array}{r} 5. \quad 6 \\ + 6 \\ \hline \end{array}$$

$$\begin{array}{r} 6. \quad 9 \\ + 9 \\ \hline \end{array}$$

$$\begin{array}{r} 7. \quad 10 \\ + 10 \\ \hline \end{array}$$


$$\begin{array}{r} 8. \quad 2 \\ + 2 \\ \hline \end{array}$$


$$\begin{array}{r} 9. \quad 5 \\ + 5 \\ \hline \end{array}$$

$$\begin{array}{r} 10. \quad 1 \\ + 1 \\ \hline \end{array}$$


$$\begin{array}{r} 11. \quad 7 \\ + 7 \\ \hline \end{array}$$

$$\begin{array}{r} 12. \quad 3 \\ + 3 \\ \hline \end{array}$$





Skip Count by 5's



1. 25, _____, _____, _____, 45, _____

2. 10, _____, _____, 25, _____, _____

3. 15, _____, 25, _____, 35, _____

4. 75, _____, _____, _____, 95, _____

5. 30, _____, _____, 45, _____, _____


6. 50, _____, 60, _____, _____, _____

7. 40, _____, _____, 55, _____, _____

8. 20, _____, _____, 35, _____, _____



Skip Count by 10's



1. 25 , _____ , _____ , _____ , 65 , _____

2. 10 , _____ , _____ , 40 , _____ , _____

3. 15 , _____ , 35 , _____ , 55 , _____


4. 45 , _____ , _____ , _____ , 85 , _____

5. 30 , _____ , _____ , 60 , _____ , _____

6. 50 , _____ , 70 , _____ , _____ , _____

7. 55 , _____ , _____ , 85 , _____


8. 20 , _____ , _____ , 50 , _____ , _____




Mary likes to play outside. On Monday, Mary saw 3 butterflies. On Tuesday, she saw 4 butterflies. How many did she see in total?



Sarah had 12 caterpillars in her butterfly garden. 4 have turned into butterflies. How many are left?



Ben found a caterpillar nest with 10 caterpillars. Ann found 6 caterpillars in her yard, and Jake found 3. How many caterpillars do they have in total?



Ben saw 8 caterpillars on Monday. On Wednesday there were only 4. How many had turned into butterflies?

Thank you for downloading this resource from

www.MathGeekMama.com!

I sincerely hope you find this resource to be helpful and enjoyable for you and your students! I only ask that you abide by Math Geek Mama's [terms of use](#), as this resource is intended for personal use in the home or classroom only. Please do not link directly the pdf file, edit the resource in any way, store them on your website, or print this resource to sell/distribute to others.

If you enjoyed this resource, I'd love to connect with you at [my website](#), TpT store or on [facebook](#), [twitter](#) or [pinterest](#)!

All clip art and fonts courtesy of:

[Brittney Murphy Design](#)

