

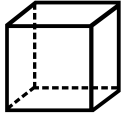
Name: \_\_\_\_\_

Date: \_\_\_\_\_

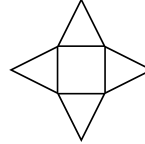
# Polyhedron Nets

Match each of the following 3-D shapes to the appropriate net.

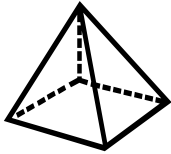
1.



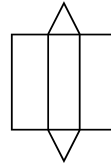
A.



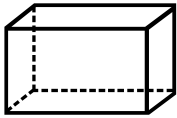
2.



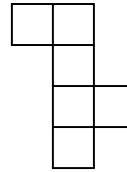
B.



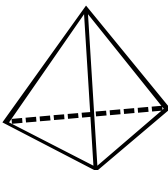
3.



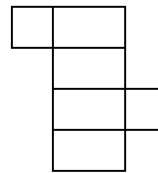
C.



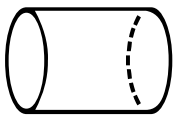
4.



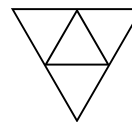
D.



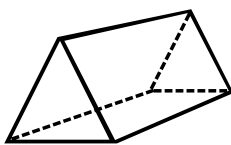
5.



E.



6.



F.

